

































## MAYAN MATH

Below is a chart with Mayan numbers.

0 	1 	2 	3 	4 
5 	6 	7 	8 	9 
10 	11 	12 	13 	14 
15 	16 	17 	18 	19 
20 	21 	22 	23 	24 
25 	26 	27 	28 	29 

Can you solve these problems using the Mayan numbers to write your answer out?

2 + 3 = \_\_\_\_\_

5 + 20 = \_\_\_\_\_

26 - 11 = \_\_\_\_\_

15 - 2 = \_\_\_\_\_

9 - 9 = \_\_\_\_\_